

FOR THE EXAMINER

EXAM. NUMBER:

Total
Marks:


Coimisiún na Scrúduithe Stáit State Examinations Commission

JUNIOR CERTIFICATE EXAMINATION, 2010

MATHEMATICS - ORDINARY LEVEL - PAPER 2 (300 marks)

MONDAY, 14 JUNE - MORNING, 9:30 to 11:30

Time: 2 hours

Attempt **ALL** questions. Each question carries 50 marks.

Answers and supporting work should be written into the boxes provided.

Extra paper and graph paper can be obtained from the Superintendent, if needed.

The symbol indicates that supporting work must be shown to obtain full marks.


Make and model of calculator used:

For Superintendent/Examiner use only:

**Centre
Stamp**


Question	Mark
1	
2	
3	
4	
5	
6	
Total	
Grade	

- 1. (a)** Find 20% of 4.6 kg.
Give your answer in grammes.




- (b)** **(i)** Dara left Lucan by car at 09:25 and arrived in Sligo at 11:55.
How long did it take Dara to travel from Lucan to Sligo?
Give your answer in hours and minutes.

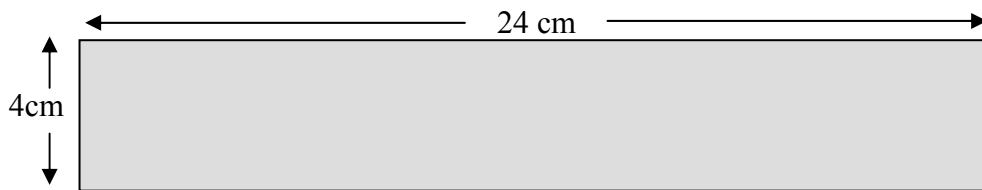
- (ii)** The distance from Lucan to Sligo is 195 km.
Calculate Dara's average speed, in km/h.



- (iii)** On the return journey from Sligo to Lucan, Dara's average speed was 60 km/h.
How long, in hours and minutes, did the return journey take?

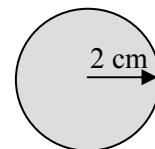



- (c) (i) A rectangular piece of silver measures 4 cm by 24 cm.
Find, in cm^2 , the area of the piece of silver.





- (ii) Brian wants to cut circular discs of radius 2 cm from the piece of silver.
What is the greatest number of discs that he can cut from the piece?



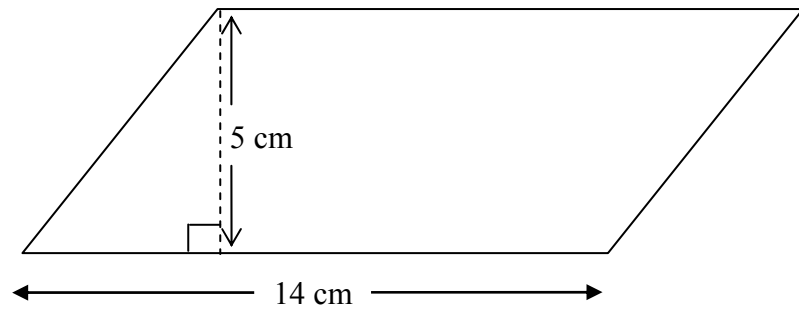


- (iii) Taking π as 3.142, find in cm^2 , the area of the silver remaining after the discs have been cut out.

Give your answer correct to one decimal place.



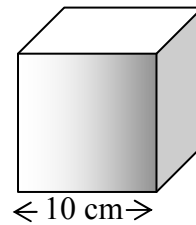
2. (a) A parallelogram has dimensions as shown in the diagram.



Find, in cm^2 , the area of the parallelogram.

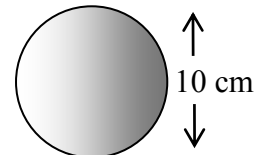


- (b) (i) A cube with side length 10 cm is shown.
Find, in cm^3 , the volume of the cube.





- (ii) A sphere with diameter 10 cm is shown.
Taking π as 3.142 find, in cm^3 , the volume of the sphere.
Give your answer to the nearest whole number.





- (iii) Express the volume of the sphere in (ii), as a percentage of the volume of the cube in (i).

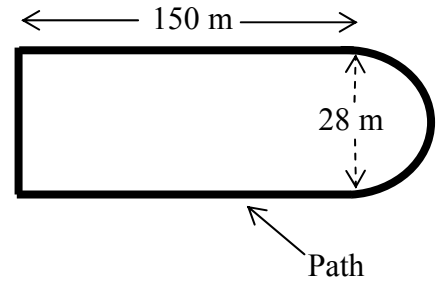


(c)

A park is in the shape of a rectangle with a semicircular end.

The rectangle is 150 m long and 28 m wide.
The diameter of the semicircular end is also 28 m.

There is a path around the park which is used for walking and jogging.



- (i) Taking π as 3.142, calculate the length of the semicircular end.
Give your answer to the nearest metre.

A large empty rectangular box for writing the answer to question (i). A small icon of a hand holding a pencil is in the top-left corner.

- (ii) Calculate the total length of the path around the park.

A large empty rectangular box for writing the answer to question (ii). A small icon of a hand holding a pencil is in the top-left corner.

- (iii) Barbara wishes to jog 2.5 km.

How many laps of the path must she complete to ensure that she jogs this distance?

A large empty rectangular box for writing the answer to question (iii). A small icon of a hand holding a pencil is in the top-left corner.



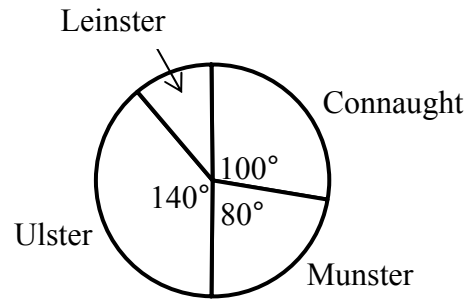
3. (a) Find the mode of the numbers:

5.1, 5.6, 5.8, 5.3, 5.6, 5.2

Mode =

- (b) A group of people was surveyed to find out which Irish province, Ulster, Munster, Connaught or Leinster, each came from.

The pie chart represents the result of that survey.



- (i) What is the measure of the angle for Leinster?



- (ii) 35 people said they came from Connaught.

How many people were in the group that was surveyed?



- (iii) How many people gave Ulster as their reply?




- (c) Each day, during a particular week, Deirdre noted the number of minutes that she spent listening to music.


Her results from Monday to Saturday are in the table below.

Day	Monday	Tuesday	Wednesday	Thursday	Friday	Saturday
Time in minutes	75	65	60	50	80	90

- (i) Draw a trend graph of these results, putting days on the horizontal axis.



- (ii) Calculate the mean number of minutes per day, that Deirdre spent listening to music.

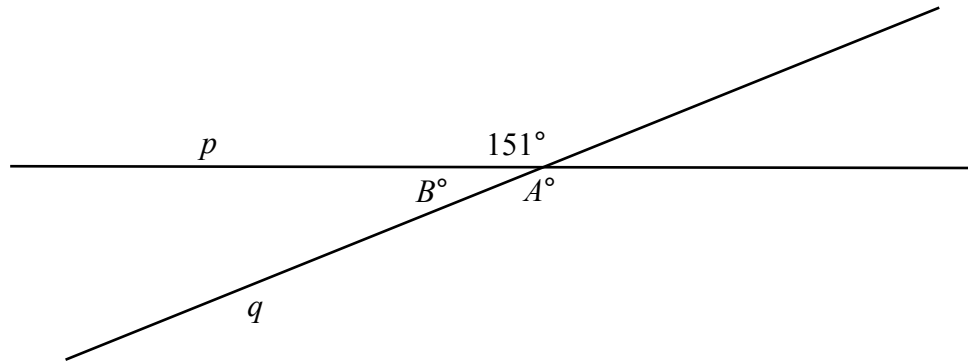


- (iii) When Sunday was included Deirdre's mean was 80 minutes.

How long did Deirdre listen to music on Sunday?

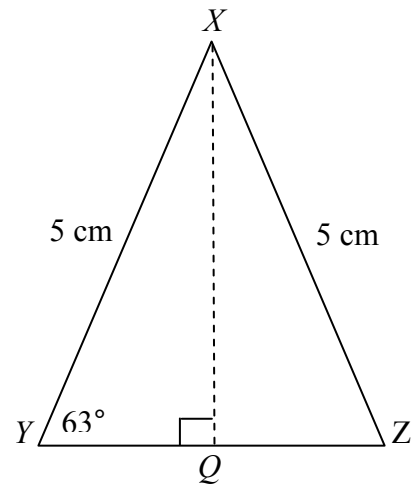


4. (a) Two lines p and q intersect as shown in the diagram.
Find the values of angles A and B .



$A =$	$B =$
-------	-------


- (b) XYZ is an isosceles triangle.
 $|XY| = |XZ| = 5 \text{ cm}$.
 $|\angle XYZ| = 63^\circ$.
 Q is the midpoint of $[YZ]$ and $XQ \perp YZ$.



- (i) Write down $|\angle XZY|$.

$ \angle XZY =$


(ii) Given that $|XQ| = 4$ cm, use the theorem of Pythagoras to find $|YQ|$.



(iii) Hence find the area of the triangle ΔXYZ .



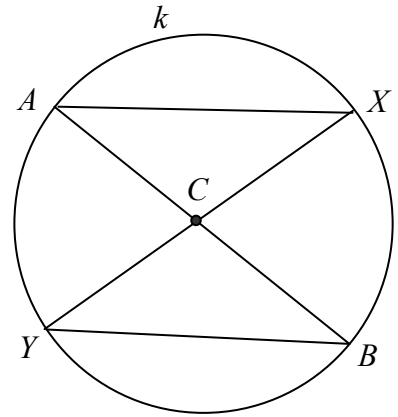
(iv) Find the perimeter of triangle ΔXYZ .




Part (c) on next page

(c)

C is the centre of the circle k .
[AB] and [XY] are diameters of k .



- (i) Name another line segment equal in length to [AC].
Give a reason for your answer.

	Answer:	_____	is the same length as [AC]
	Reason:	_____	

- (ii) Name the image of $\triangle AXC$ by central symmetry in C .

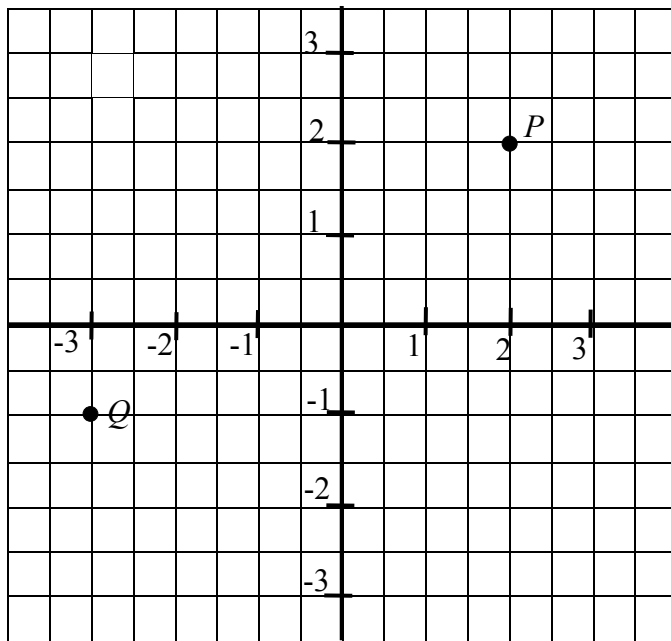
- (iii) Complete the following reasons for the fact that the triangles $\triangle AXC$ and $\triangle BYC$ are congruent.

Reasons:	In $\triangle AXC$		In $\triangle BYC$
	_____	=	_____
	_____	=	_____
	_____	=	_____

5. Note: Coordinate Geometry Formulae are given on Page 13.




- (a) Write down the co-ordinates of the points P and Q

$P =$
$Q =$




- (b) C is the point $(5, -4)$ and D is the point $(3, 8)$.

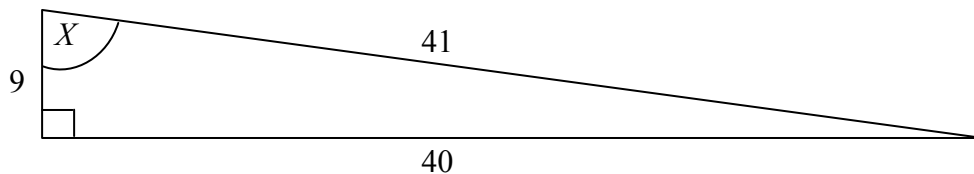
Find each of the following:

(i)		the midpoint of $[CD]$
(ii)		the slope of CD
(iii)		the length of $[CD]$

If you wish to draw a diagram, use the next page.



6. (a) The diagram shows a right-angled triangle with measurements as shown.



- (i) Write down the length of the hypotenuse of the triangle.

Length of the hypotenuse =

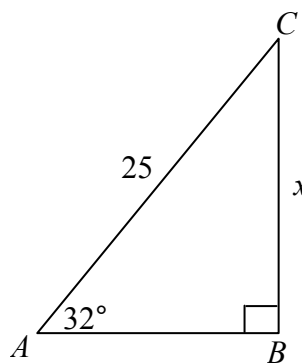
- (ii) Write down the value of $\cos X$ as a fraction.

$\cos X =$

- (b) In the right-angled triangle ABC ,

$$|AC| = 25, \quad |\angle BAC| = 32^\circ.$$

$$\text{Let } |CB| = x.$$



- (i) Using your calculator find $\sin 32^\circ$.
Write your answer correct to two decimal places.

$\sin 32^\circ =$

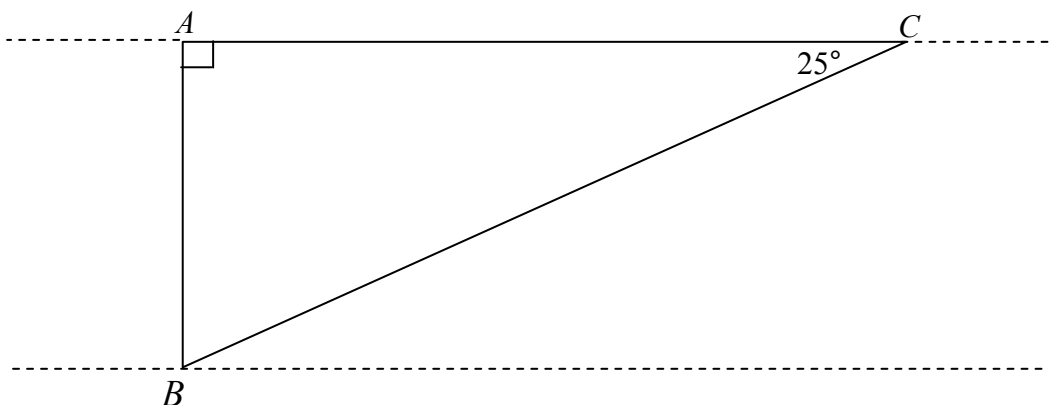
- (ii) Using the diagram of the triangle ABC write $\sin 32^\circ$ as a fraction.

$\sin 32^\circ =$

- (ii) Hence, or otherwise, find x , the value of $|CB|$.



- (c) Seán wishes to measure the width of a canal.
He is at a point A directly opposite a landmark B on the opposite bank.
Seán walks 50 paces along the bank of the canal to point C .
He measures the angle ACB and finds it is 25° .



- (i) Each of Seán's paces is 0.7 m.
Calculate $|AC|$.



- (ii) Hence calculate the width of the canal, $|AB|$.
Give your answer to the nearest metre.

Space for extra work

